



# Counting: Tens and Ones

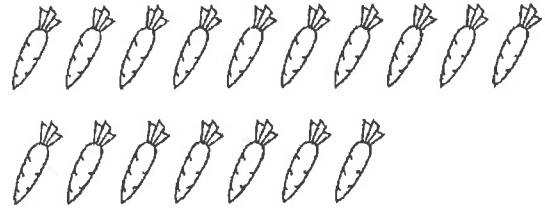
Circle each complete group of ten. Write how many tens, how many ones, and how many in all. For example:




2 tens + 4 ones = 24




\_\_\_\_\_ tens + \_\_\_\_\_ ones = \_\_\_\_\_




\_\_\_\_\_ tens + \_\_\_\_\_ ones = \_\_\_\_\_




\_\_\_\_\_ tens + \_\_\_\_\_ ones = \_\_\_\_\_



\_\_\_\_\_ tens + \_\_\_\_\_ ones = \_\_\_\_\_



\_\_\_\_\_ tens + \_\_\_\_\_ ones = \_\_\_\_\_



\_\_\_\_\_ tens + \_\_\_\_\_ ones = \_\_\_\_\_

